


Plusrechnen mit Einer in der Hundertertafel

1


Trage Rechenpfeile in den Farben der Aufgaben ein. Ergänze die Ergebnisse.

1	2	3	4	5	6	7	8	9	10
11	12	13	14	15	16	17	18	19	20
21	22	23	24	25	26	27	28	29	30
31	32	33	34	35	36	37	38	39	40
41	42	43	44	45	46	47	48	49	50
51	52	53	54	55	56	57	58	59	60
61	62	63	64	65	66	67	68	69	70
71	72	73	74	75	76	77	78	79	80
81	82	83	84	85	86	87	88	89	90
91	92	93	94	95	96	97	98	99	100



$22 + 7 =$ $71 + 5 =$ $43 + 7 =$ $94 + 3 =$

1	2	3	4	5	6	7	8	9	10
11	12	13	14	15	16	17	18	19	20
21	22	23	24	25	26	27	28	29	30
31	32	33	34	35	36	37	38	39	40
41	42	43	44	45	46	47	48	49	50
51	52	53	54	55	56	57	58	59	60
61	62	63	64	65	66	67	68	69	70
71	72	73	74	75	76	77	78	79	80
81	82	83	84	85	86	87	88	89	90
91	92	93	94	95	96	97	98	99	100



$13 + 7 =$ $64 + 5 =$ $32 + 6 =$ $81 + 4 =$

Plusrechnen mit Einer in der Hundertertafel

1

Trage Rechenpfeile in den Farben der Aufgaben ein. Ergänze die Ergebnisse.

1	2	3	4	5	6	7	8	9	10
11	12	13	14	15	16	17	18	19	20
21	22	23	24	25	26	27	28	29	30
31	32	33	34	35	36	37	38	39	40
41	42	43	44	45	46	47	48	49	50
51	52	53	54	55	56	57	58	59	60
61	62	63	64	65	66	67	68	69	70
71	72	73	74	75	76	77	78	79	80
81	82	83	84	85	86	87	88	89	90
91	92	93	94	95	96	97	98	99	100



$24 + 5 =$

$53 + 4 =$

$81 + 7 =$

$32 + 3 =$

1	2	3	4	5	6	7	8	9	10
11	12	13	14	15	16	17	18	19	20
21	22	23	24	25	26	27	28	29	30
31	32	33	34	35	36	37	38	39	40
41	42	43	44	45	46	47	48	49	50
51	52	53	54	55	56	57	58	59	60
61	62	63	64	65	66	67	68	69	70
71	72	73	74	75	76	77	78	79	80
81	82	83	84	85	86	87	88	89	90
91	92	93	94	95	96	97	98	99	100



$94 + 6 =$

$31 + 8 =$

$52 + 5 =$


$75 + 4 =$

Plusrechnen mit Einer üben

1

Berechne die Aufgaben. Male die Felder mit den Ergebniszahlen aus.

1	2	3	4	5	6	7	8	9	10
11	12	13	14	15	16	17	18	19	20
21	22	23	24	25	26	27	28	29	30
31	32	33	34	35	36	37	38	39	40
41	42	43	44	45	46	47	48	49	50
51	52	53	54	55	56	57	58	59	60
61	62	63	64	65	66	67	68	69	70
71	72	73	74	75	76	77	78	79	80
81	82	83	84	85	86	87	88	89	90
91	92	93	94	95	96	97	98	99	100



$3 + 3 = 6$

$50 + 3 = \dots\dots$

$34 + 2 = \dots\dots$

$60 + 2 = \dots\dots$

$22 + 4 = \dots\dots$

$50 + 1 = \dots\dots$

$71 + 2 = \dots\dots$

$57 + 3 = \dots\dots$

$51 + 5 = \dots\dots$

$11 + 5 = \dots\dots$

$12 + 5 = \dots\dots$

$36 + 2 = \dots\dots$

$84 + 3 = \dots\dots$

$82 + 3 = \dots\dots$

$50 + 5 = \dots\dots$

$81 + 3 = \dots\dots$

$76 + 2 = \dots\dots$

$55 + 4 = \dots\dots$

$53 + 4 = \dots\dots$

$52 + 2 = \dots\dots$

$11 + 4 = \dots\dots$

$22 + 2 = \dots\dots$

$20 + 5 = \dots\dots$

$31 + 3 = \dots\dots$

$41 + 5 = \dots\dots$

$81 + 5 = \dots\dots$

$54 + 4 = \dots\dots$

$51 + 1 = \dots\dots$

$32 + 7 = \dots\dots$

$23 + 4 = \dots\dots$

$22 + 6 = \dots\dots$


$33 + 4 = \dots\dots$

$67 + 2 = \dots\dots$

$2 + 5 = \dots\dots$

$32 + 1 = \dots\dots$

$33 + 2 = \dots\dots$



1. Plusrechnen mit Zehnern am Zahlenstrahl

1

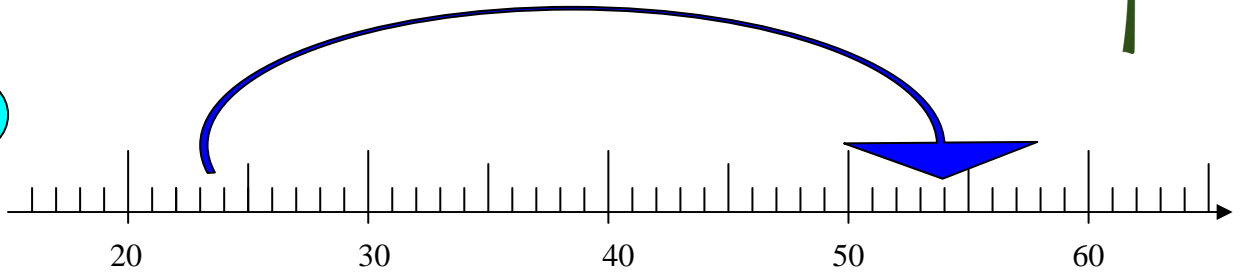
Rechne am Zahlenstrahl.

Zeichene Rechenpfeile in den Farben der Aufgaben ein.

Ergänze die Ergebnisse.



a



$24 + 30 =$

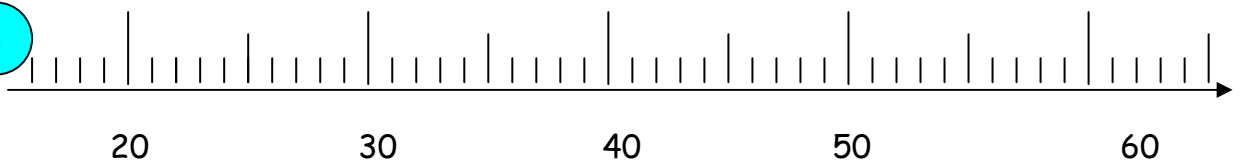
54

$41 + 20 =$

$33 + 30 =$

$22 + 10 =$

b



$34 + 20 =$

$22 + 30 =$

$31 + 30 =$

$45 + 10 =$

2. Finde die Aufgaben

14

8

6

$8 + 6 =$	<input type="text"/>
$\square + \square =$	<input type="text"/>
$\square - \square =$	<input type="text"/>
$\square - \square =$	<input type="text"/>

$\square + \square =$	<input type="text"/>
$\square + \square =$	<input type="text"/>
$12 - \square =$	9
$\square - \square =$	<input type="text"/>

$\square + \square =$	<input type="text"/>
$18 - 9 =$	<input type="text"/>

3. Rechne!

$5 + 6 + 9 =$

$14 - 3 - 4 =$

$6 + 4 +$

 $= 15$

$7 + 2 + 5 =$

$16 - 8 - 2 =$

$16 - 7 -$

 $= 6$

1

Rechne in der Hundertertafel.

Zeichne Rechenpfeile in den Farben der Aufgaben ein.

Ergänze die Ergebnisse.

a

1	2	3	4	5	6	7	8	9	10
11	12	13	14	15	16	17	18	19	20
21	22	23	24	25	26	27	28	29	30
31	32	33	34	35	36	37	38	39	40
41	42	43	44	45	46	47	48	49	50
51	52	53	54	55	56	57	58	59	60
61	62	63	64	65	66	67	68	69	70
71	72	73	74	75	76	77	78	79	80
81	82	83	84	85	86	87	88	89	90
91	92	93	94	95	96	97	98	99	100

$23 + 30 = 53$
 $16 + 60 = \square$
 $29 + 60 = \square$
 $51 + 30 = \square$

b

1	2	3	4	5	6	7	8	9	10
11	12	13	14	15	16	17	18	19	20
21	22	23	24	25	26	27	28	29	30
31	32	33	34	35	36	37	38	39	40
41	42	43	44	45	46	47	48	49	50
51	52	53	54	55	56	57	58	59	60
61	62	63	64	65	66	67	68	69	70
71	72	73	74	75	76	77	78	79	80
81	82	83	84	85	86	87	88	89	90
91	92	93	94	95	96	97	98	99	100


$22 + 70 = \square$
 $45 + 30 = \square$
 $39 + 40 = \square$
 $57 + 20 = \square$





Mit Zehner- Einer- Bildern rechnen





1 Schreibe zu jedem Bild eine Rechenaufgabe.


a  $24 + 30 = 54$


b  $\square + \square = \square$


c  $\square + \square = \square$

d  $\square + \square = \square$


e  $\square + \square = \square$

f  $\square + \square = \square$

g  $\square + \square = \square$

h  $\square + \square = \square$

2 Zeichne zu jeder Rechenaufgabe ein Bild. Ergänze das Ergebnis.

a $46 + 20 = \square$


b $53 + 30 = \square$

c $38 + 20 = \square$

d $44 + 50 = \square$

e $27 + 40 = \square$

f $63 + 10 = \square$

g $21 + 60 = \square$

h $62 + 30 = \square$

1	2	3	4	5	6	7	8	9	10
11	12	13	14	15	16	17	18	19	20
21	22	23	24	25	26	27	28	29	30
31	32	33	34	35	36	37	38	39	40
41	42	43	44	45	46	47	48	49	50
51	52	53	54	55	56	57	58	59	60
61	62	63	64	65	66	67	68	69	70
71	72	73	74	75	76	77	78	79	80
81	82	83	84	85	86	87	88	89	90
91	92	93	94	95	96	97	98	99	100

$$22 + 7 = 29$$

$$71 + 5 = 76$$

$$43 + 7 = 50$$

$$94 + 3 = 97$$

1	2	3	4	5	6	7	8	9	10
11	12	13	14	15	16	17	18	19	20
21	22	23	24	25	26	27	28	29	30
31	32	33	34	35	36	37	38	39	40
41	42	43	44	45	46	47	48	49	50
51	52	53	54	55	56	57	58	59	60
61	62	63	64	65	66	67	68	69	70
71	72	73	74	75	76	77	78	79	80
81	82	83	84	85	86	87	88	89	90
91	92	93	94	95	96	97	98	99	100

$$13 + 7 = 20$$

$$64 + 5 = 69$$

$$32 + 6 = 38$$

$$81 + 4 = 85$$

1	2	3	4	5	6	7	8	9	10
11	12	13	14	15	16	17	18	19	20
21	22	23	24	25	26	27	28	29	30
31	32	33	34	35	36	37	38	39	40
41	42	43	44	45	46	47	48	49	50
51	52	53	54	55	56	57	58	59	60
61	62	63	64	65	66	67	68	69	70
71	72	73	74	75	76	77	78	79	80
81	82	83	84	85	86	87	88	89	90
91	92	93	94	95	96	97	98	99	100

$$24 + 5 = 29$$

$$53 + 4 = 57$$

$$81 + 7 = 88$$

$$32 + 3 = 35$$

1	2	3	4	5	6	7	8	9	10
11	12	13	14	15	16	17	18	19	20
21	22	23	24	25	26	27	28	29	30
31	32	33	34	35	36	37	38	39	40
41	42	43	44	45	46	47	48	49	50
51	52	53	54	55	56	57	58	59	60
61	62	63	64	65	66	67	68	69	70
71	72	73	74	75	76	77	78	79	80
81	82	83	84	85	86	87	88	89	90
91	92	93	94	95	96	97	98	99	100

$$94 + 6 = 100$$

$$31 + 8 = 39$$

$$52 + 5 = 57$$

$$75 + 4 = 79$$

1)

1	2	3	4	5	6	7	8	9	10
11	12	13	14	15	16	17	18	19	20
21	22	23	24	25	26	27	28	29	30
31	32	33	34	35	36	37	38	39	40
41	42	43	44	45	46	47	48	49	50
51	52	53	54	55	56	57	58	59	60
61	62	63	64	65	66	67	68	69	70
71	72	73	74	75	76	77	78	79	80
81	82	83	84	85	86	87	88	89	90
91	92	93	94	95	96	97	98	99	100

$3 + 3 = 6$

$50 + 3 = 53$

$34 + 2 = 36$

$60 + 2 = 62$

$22 + 4 = 26$

$50 + 1 = 51$

$71 + 2 = 73$

$57 + 3 = 60$

$51 + 5 = 56$

$11 + 5 = 16$

$12 + 5 = 17$

$36 + 2 = 38$

$84 + 3 = 87$

$82 + 3 = 85$

$50 + 5 = 55$

$81 + 3 = 84$

$76 + 2 = 78$

$55 + 4 = 59$

$53 + 4 = 57$

$52 + 2 = 54$

$11 + 4 = 15$

$22 + 2 = 24$

$20 + 5 = 25$

$31 + 3 = 34$

$41 + 5 = 46$

$81 + 5 = 86$

$54 + 4 = 58$

$51 + 1 = 52$

$32 + 7 = 39$

$23 + 4 = 27$

$22 + 6 = 28$

$33 + 4 = 37$

$67 + 2 = 69$

$2 + 5 = 7$

$32 + 1 = 33$

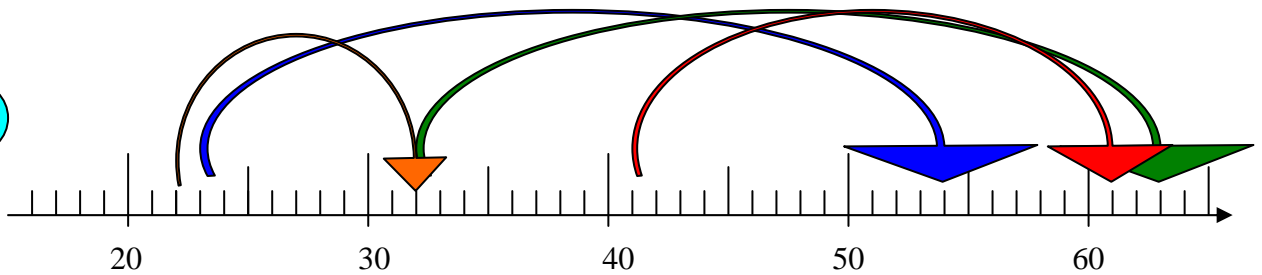
$33 + 2 = 35$

1. Rechne am Zahlenstrahl.

Zeichene Rechenpfeile in den Farben der Aufgaben ein.

Ergänze die Ergebnisse.

a



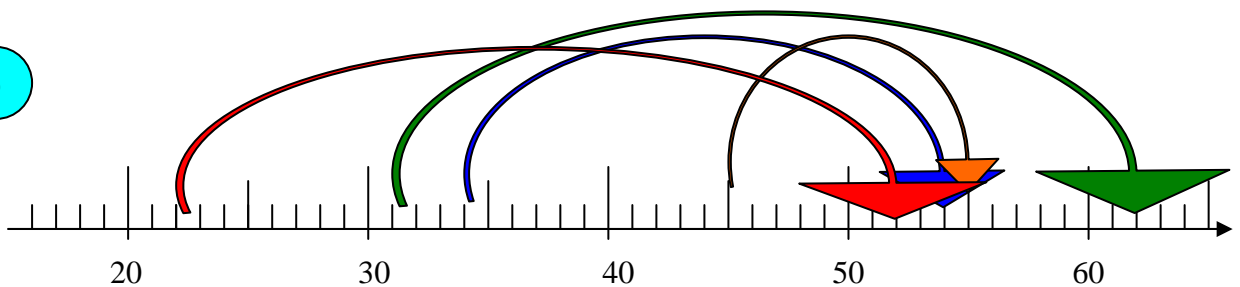
$$24 + 30 = 54$$

$$41 + 20 = 61$$

$$33 + 30 = 66$$

$$22 + 10 = 32$$

b



$$34 + 20 = 54$$

$$22 + 30 = 52$$

$$31 + 30 = 61$$

$$45 + 10 = 55$$

2. Finde die Aufgaben

14
8 6

$$8 + 6 = 14$$

$$6 + 8 = 14$$

$$14 - 6 = 8$$

$$14 - 8 = 6$$

12
3 9

$$9 + 3 = 12$$

$$3 + 9 = 12$$

$$12 - 3 = 9$$

$$12 - 9 = 3$$

18
9 9

$$9 + 9 = 18$$

$$18 - 9 = 9$$

3. Rechne!

$$5 + 6 + 9 = 20$$

$$7 + 2 + 5 = 14$$

$$4 - 3 - 4 = 7$$

$$6 - 8 - 2 = 6$$

$$6 + 4 + 5 = 15$$

$$16 - 7 - 3 = 6$$

a)

1	2	3	4	5	6	7	8	9	10
11	12	13	14	15	16	17	18	19	20
21	22	23	24	25	26	27	28	29	30
31	32	33	34	35	36	37	38	39	40
41	42	43	44	45	46	47	48	49	50
51	52	53	54	55	56	57	58	59	60
61	62	63	64	65	66	67	68	69	70
71	72	73	74	75	76	77	78	79	80
81	82	83	84	85	86	87	88	89	90
91	92	93	94	95	96	97	98	99	100

$$23 + 30 = 53 \quad 16 + 60 = 76 \quad 29 + 60 = 89 \quad 51 + 30 = 81$$

1	2	3	4	5	6	7	8	9	10
11	12	13	14	15	16	17	18	19	20
21	22	23	24	25	26	27	28	29	30
31	32	33	34	35	36	37	38	39	40
41	42	43	44	45	46	47	48	49	50
51	52	53	54	55	56	57	58	59	60
61	62	63	64	65	66	67	68	69	70
71	72	73	74	75	76	77	78	79	80
81	82	83	84	85	86	87	88	89	90
91	92	93	94	95	96	97	98	99	100

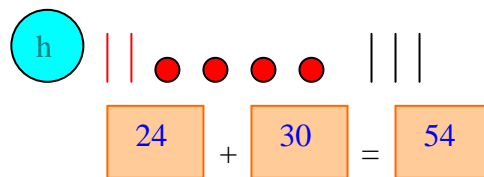
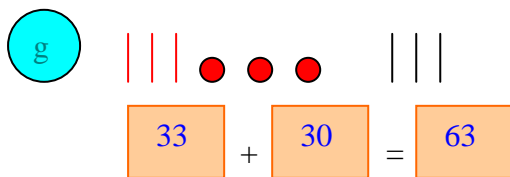
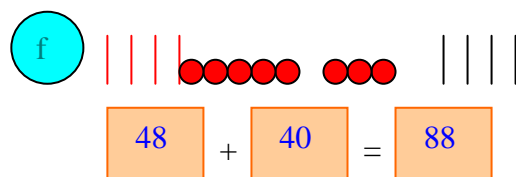
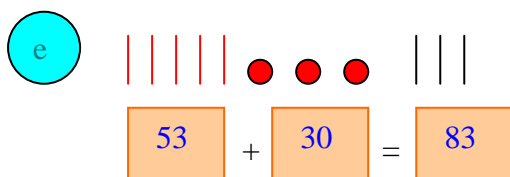
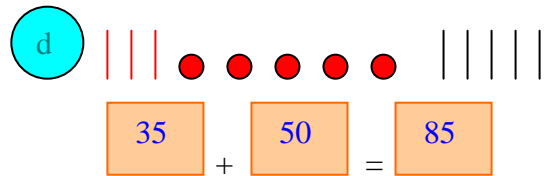
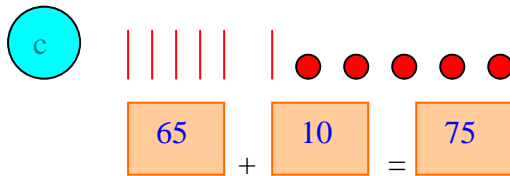
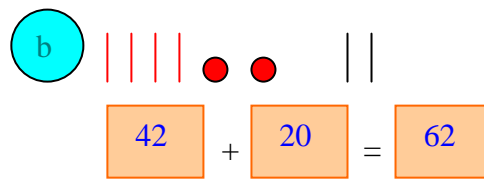
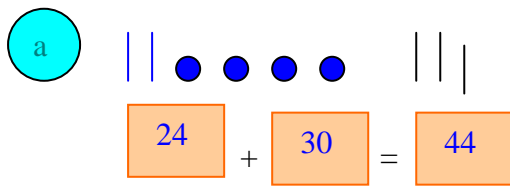
$$22 + 70 = 92$$

$$45 + 30 = 75$$

$$39 + 40 = 79$$

$$57 + 20 = 77$$

1. Schreibe zu jedem Bild eine Rechenaufgabe.



2. Zeichne zu jeder Rechenaufgabe ein Bild.

Ergänze das Ergebnis.

