

Name	Vorname	Klasse

1.) Schreibe das Ergebnis als Zahl

$$\begin{array}{|c|} \hline \bullet \\ \hline \end{array} + \begin{array}{|c|} \hline \bullet \\ \hline \end{array} = \square$$

$$\begin{array}{|c|} \hline \bullet \\ \bullet \\ \hline \end{array} + \begin{array}{|c|} \hline \bullet \\ \hline \end{array} = \square$$

$$\begin{array}{|c|} \hline \bullet \\ \hline \end{array} + \begin{array}{|c|} \hline \bullet \\ \bullet \\ \bullet \\ \hline \end{array} = \square$$

$$\begin{array}{|c|} \hline \bullet \\ \bullet \\ \bullet \\ \bullet \\ \hline \end{array} - \begin{array}{|c|} \hline \bullet \\ \bullet \\ \hline \end{array} = \square$$

$$\begin{array}{|c|} \hline \bullet \\ \bullet \\ \bullet \\ \bullet \\ \hline \end{array} + \begin{array}{|c|} \hline \bullet \\ \bullet \\ \hline \end{array} = \square$$

$$\begin{array}{|c|} \hline \bullet \\ \bullet \\ \hline \end{array} + \begin{array}{|c|} \hline \bullet \\ \bullet \\ \bullet \\ \hline \end{array} = \square$$

$$\begin{array}{|c|} \hline \bullet \\ \bullet \\ \bullet \\ \hline \end{array} + \begin{array}{|c|} \hline \bullet \\ \bullet \\ \bullet \\ \bullet \\ \hline \end{array} = \square$$

$$\begin{array}{|c|} \hline \bullet \\ \bullet \\ \bullet \\ \bullet \\ \hline \end{array} - \begin{array}{|c|} \hline \bullet \\ \bullet \\ \bullet \\ \hline \end{array} = \square$$

$$\begin{array}{|c|} \hline \bullet \\ \bullet \\ \bullet \\ \hline \end{array} - \begin{array}{|c|} \hline \bullet \\ \hline \end{array} = \square$$



2.) Fülle die Lücken mit Zahlen (zum Gewöhnen erst mal nur Addition)

$$\begin{array}{|c|} \hline \bullet \\ \hline \end{array} + \square = \begin{array}{|c|} \hline \bullet \\ \bullet \\ \bullet \\ \hline \end{array} + \begin{array}{|c|} \hline \bullet \\ \bullet \\ \bullet \\ \hline \end{array} = \square$$

$$\square + \begin{array}{|c|} \hline \bullet \\ \hline \end{array} = \begin{array}{|c|} \hline \bullet \\ \bullet \\ \bullet \\ \hline \end{array} + \square = \begin{array}{|c|} \hline \bullet \\ \bullet \\ \bullet \\ \hline \end{array}$$

$$\begin{array}{|c|} \hline \bullet \\ \bullet \\ \hline \end{array} + \square = \begin{array}{|c|} \hline \bullet \\ \bullet \\ \bullet \\ \hline \end{array} + \begin{array}{|c|} \hline \bullet \\ \bullet \\ \hline \end{array} = \square$$

$$\square + \begin{array}{|c|} \hline \bullet \\ \bullet \\ \bullet \\ \hline \end{array} = \begin{array}{|c|} \hline \bullet \\ \bullet \\ \bullet \\ \hline \end{array} + \begin{array}{|c|} \hline \bullet \\ \bullet \\ \hline \end{array} = \square$$

Name	Vorname	Klasse

1. Fülle die Lücken mit Zahlen (gemischte Aufgaben)


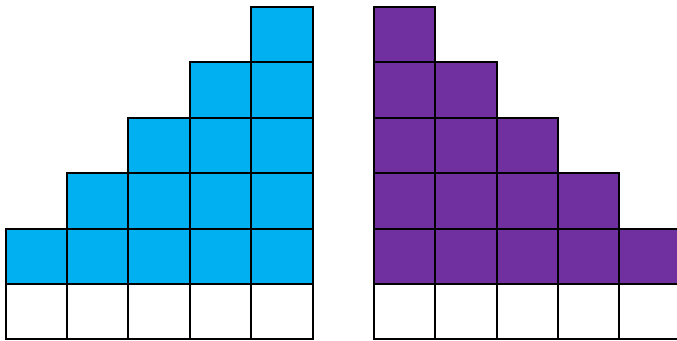
	+		=	<input type="text"/>	-		=	<input type="text"/>
	-	<input type="text"/>	=		+		=	<input type="text"/>
<input type="text"/>	+		=		+	<input type="text"/>	=	
	+		=	<input type="text"/>	-		=	<input type="text"/>
	-	<input type="text"/>	=		+	<input type="text"/>	=	
<input type="text"/>	+		=		-		=	<input type="text"/>
	-		=	<input type="text"/>	+		=	<input type="text"/>
<input type="text"/>	+		=		+	<input type="text"/>	=	



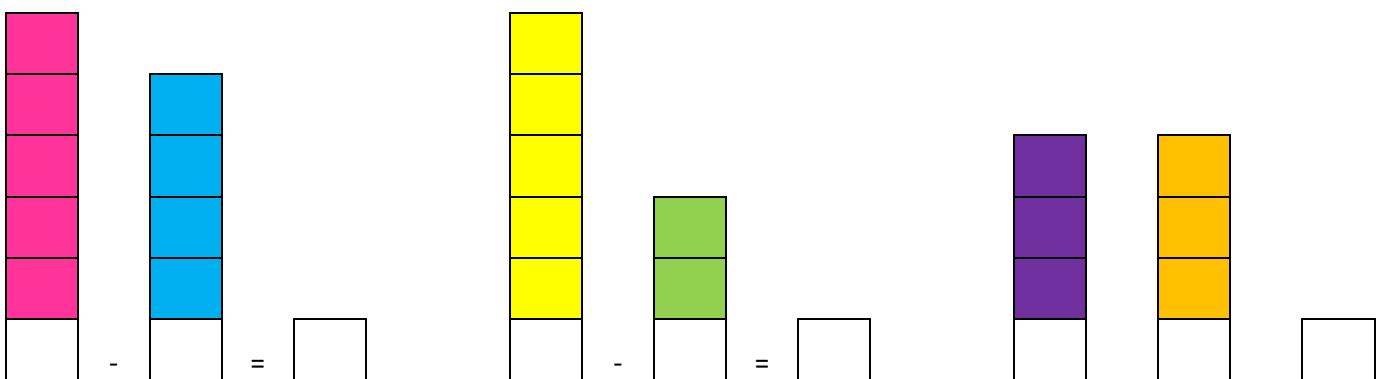
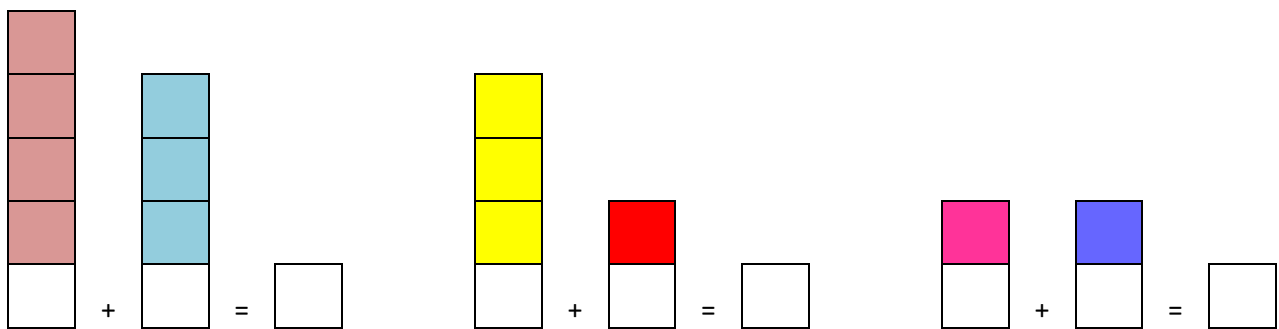
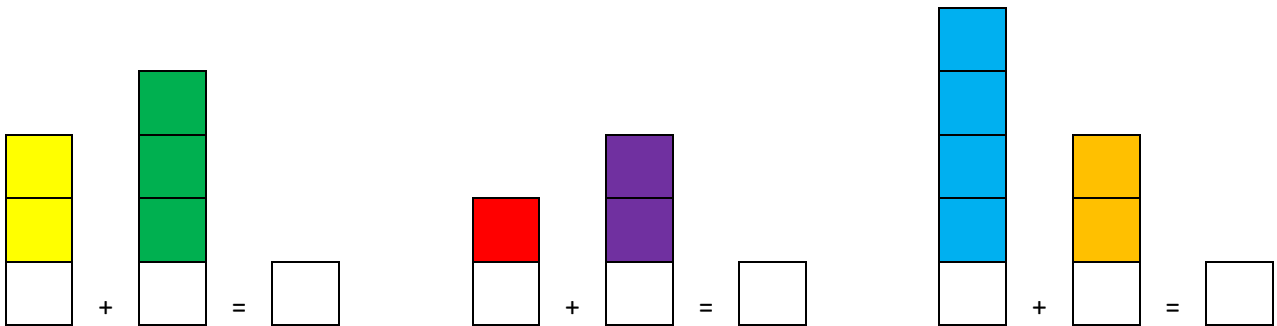
2. Immer erst 10 binden – dann die Zahl aufschreiben!

 <table border="1" style="width: 100px; height: 30px;"> <tr> <td style="width: 50px; text-align: center;">1</td> <td style="width: 50px; text-align: center;">2</td> </tr> </table>	1	2	 <table border="1" style="width: 100px; height: 30px;"> <tr> <td style="width: 50px;"></td> <td style="width: 50px;"></td> </tr> </table>			 <table border="1" style="width: 100px; height: 30px;"> <tr> <td style="width: 50px;"></td> <td style="width: 50px;"></td> </tr> </table>		
1	2							
 <table border="1" style="width: 100px; height: 30px;"> <tr> <td style="width: 50px;"></td> <td style="width: 50px;"></td> </tr> </table>			 <table border="1" style="width: 100px; height: 30px;"> <tr> <td style="width: 50px;"></td> <td style="width: 50px;"></td> </tr> </table>			 <table border="1" style="width: 100px; height: 30px;"> <tr> <td style="width: 50px;"></td> <td style="width: 50px;"></td> </tr> </table>		

1. Aufgabe: Trage die Menge der Kästchen ein



2. Schreibe die Zahlen in die Kästchen und rechne dann aus



1.) Schreibe das Ergebnis als Zahl

$$\begin{array}{|c|} \hline \bullet \\ \hline \end{array} + \begin{array}{|c|} \hline \bullet \\ \hline \end{array} = \begin{array}{|c|} \hline 2 \\ \hline \end{array}$$

$$\begin{array}{|c|} \hline \bullet \\ \bullet \\ \hline \end{array} + \begin{array}{|c|} \hline \bullet \\ \hline \end{array} = \begin{array}{|c|} \hline 3 \\ \hline \end{array}$$

$$\begin{array}{|c|} \hline \bullet \\ \hline \end{array} + \begin{array}{|c|} \hline \bullet \\ \bullet \\ \bullet \\ \hline \end{array} = \begin{array}{|c|} \hline 4 \\ \hline \end{array}$$

$$\begin{array}{|c|} \hline \bullet \\ \bullet \\ \bullet \\ \bullet \\ \hline \end{array} - \begin{array}{|c|} \hline \bullet \\ \bullet \\ \hline \end{array} = \begin{array}{|c|} \hline 3 \\ \hline \end{array}$$

$$\begin{array}{|c|} \hline \bullet \\ \bullet \\ \bullet \\ \bullet \\ \hline \end{array} + \begin{array}{|c|} \hline \bullet \\ \bullet \\ \hline \end{array} = \begin{array}{|c|} \hline 8 \\ \hline \end{array}$$

$$\begin{array}{|c|} \hline \bullet \\ \bullet \\ \hline \end{array} + \begin{array}{|c|} \hline \bullet \\ \bullet \\ \bullet \\ \bullet \\ \hline \end{array} = \begin{array}{|c|} \hline 6 \\ \hline \end{array}$$

$$\begin{array}{|c|} \hline \bullet \\ \bullet \\ \bullet \\ \hline \end{array} + \begin{array}{|c|} \hline \bullet \\ \bullet \\ \bullet \\ \bullet \\ \hline \end{array} = \begin{array}{|c|} \hline 9 \\ \hline \end{array}$$

$$\begin{array}{|c|} \hline \bullet \\ \bullet \\ \bullet \\ \hline \end{array} - \begin{array}{|c|} \hline \bullet \\ \bullet \\ \hline \end{array} = \begin{array}{|c|} \hline 1 \\ \hline \end{array}$$

$$\begin{array}{|c|} \hline \bullet \\ \bullet \\ \hline \end{array} - \begin{array}{|c|} \hline \bullet \\ \hline \end{array} = \begin{array}{|c|} \hline 3 \\ \hline \end{array}$$

2.) Fülle die Lücken mit Zahlen (zum gewöhnen erst mal nur Addition)

























$$\begin{array}{|c|} \hline \bullet \\ \hline \end{array} + \begin{array}{|c|} \hline 4 \\ \hline \end{array} = \begin{array}{|c|} \hline \bullet \\ \bullet \\ \bullet \\ \hline \end{array} + \begin{array}{|c|} \hline \bullet \\ \bullet \\ \hline \end{array} = \begin{array}{|c|} \hline 9 \\ \hline \end{array}$$

$$\begin{array}{|c|} \hline 3 \\ \hline \end{array} + \begin{array}{|c|} \hline \bullet \\ \hline \end{array} = \begin{array}{|c|} \hline \bullet \\ \bullet \\ \hline \end{array} + \begin{array}{|c|} \hline 1 \\ \hline \end{array} = \begin{array}{|c|} \hline \bullet \\ \bullet \\ \bullet \\ \hline \end{array}$$

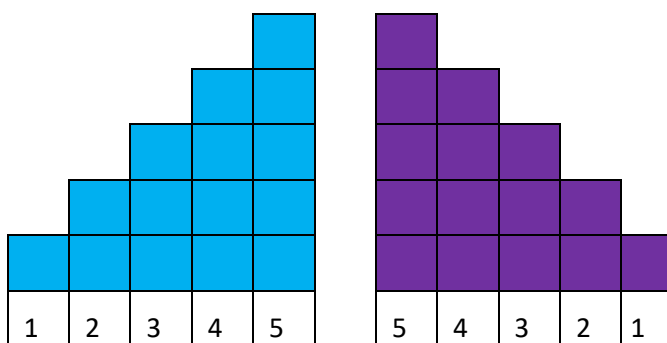
$$\begin{array}{|c|} \hline \bullet \\ \bullet \\ \bullet \\ \hline \end{array} + \begin{array}{|c|} \hline 3 \\ \hline \end{array} = \begin{array}{|c|} \hline \bullet \\ \bullet \\ \bullet \\ \hline \end{array} + \begin{array}{|c|} \hline \bullet \\ \bullet \\ \hline \end{array} = \begin{array}{|c|} \hline 8 \\ \hline \end{array}$$

$$\begin{array}{|c|} \hline 2 \\ \hline \end{array} + \begin{array}{|c|} \hline \bullet \\ \bullet \\ \hline \end{array} = \begin{array}{|c|} \hline \bullet \\ \bullet \\ \bullet \\ \hline \end{array} + \begin{array}{|c|} \hline \bullet \\ \bullet \\ \bullet \\ \hline \end{array} = \begin{array}{|c|} \hline 9 \\ \hline \end{array}$$

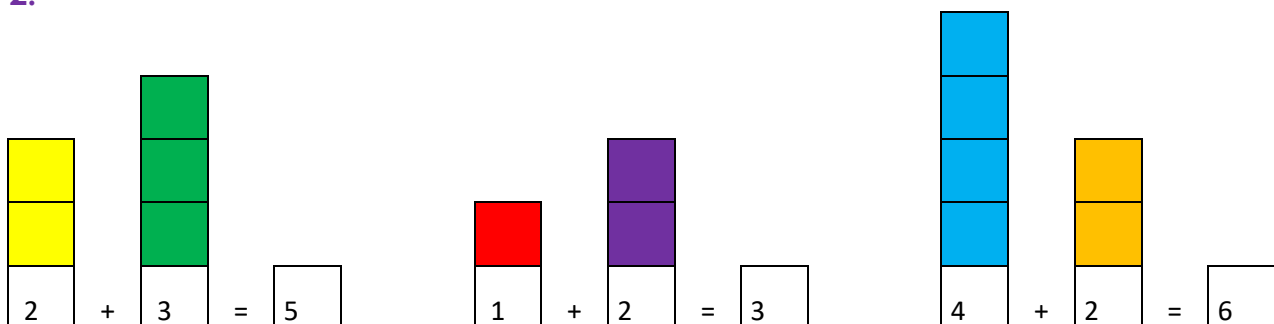
2.) Fülle die Lücken mit Zahlen (gemischte Aufgaben)

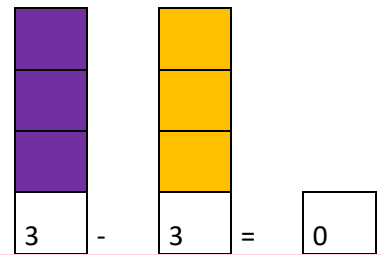
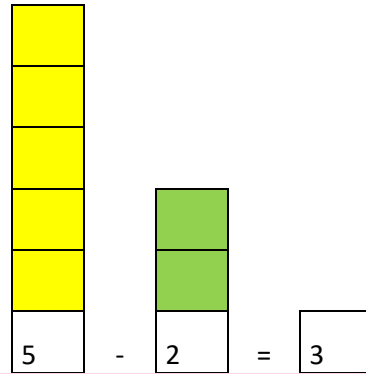
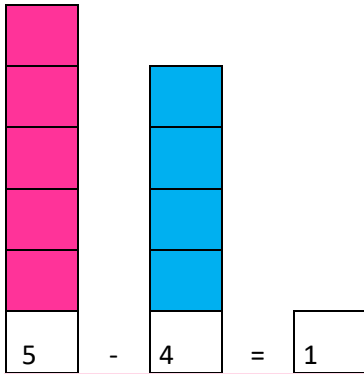
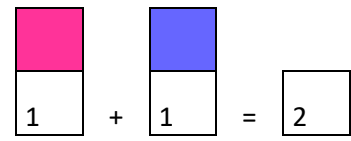
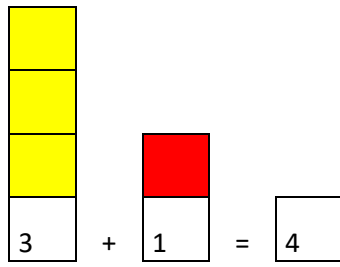
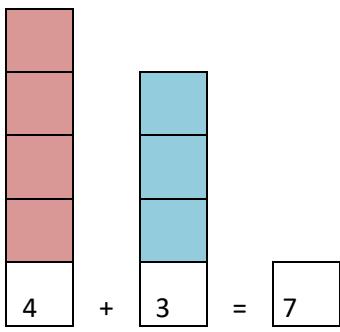
	+		=	<input type="text" value="9"/>	-		=	<input type="text" value="6"/>
	-	<input type="text" value="2"/>	=		+		=	<input type="text" value="8"/>
<input type="text" value="2"/>	+		=		+	<input type="text" value="2"/>	=	
	+		=	<input type="text" value="7"/>	-		=	<input type="text" value="4"/>
	-	<input type="text" value="2"/>	=		+	<input type="text" value="3"/>	=	
<input type="text" value="3"/>	+		=		-		=	<input type="text" value="2"/>
	-		=	<input type="text" value="1"/>	+		=	<input type="text" value="7"/>
<input type="text" value="1"/>	+		=		+	<input type="text" value="2"/>	=	

1.



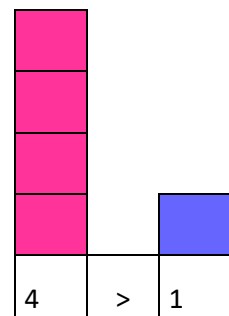
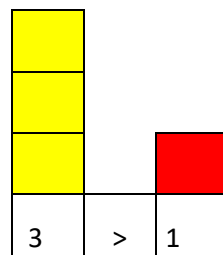
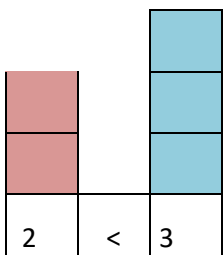
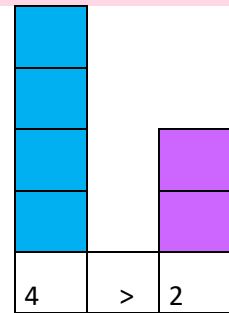
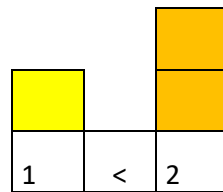
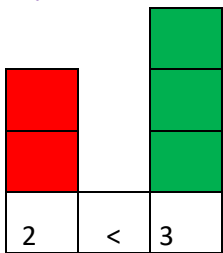
2.





Die Zahlen von 1 bis 20 Lösung Arbeitsblatt 4

1.



2.

