
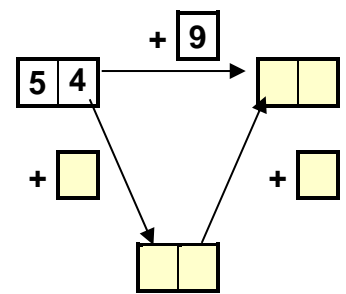
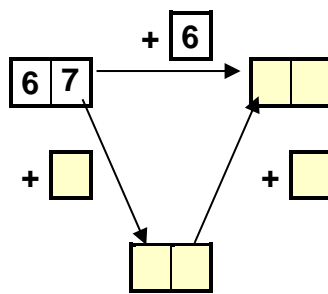
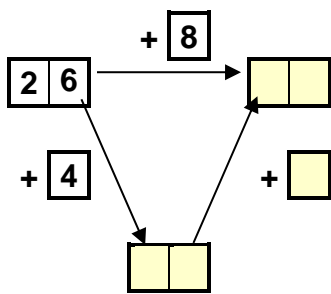
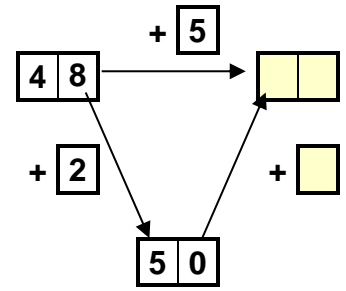
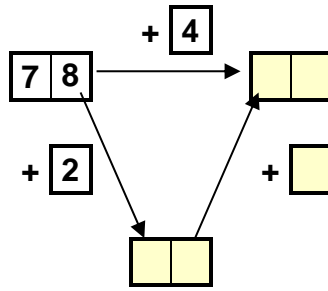
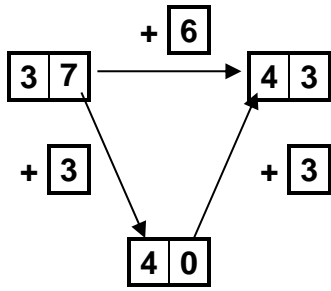
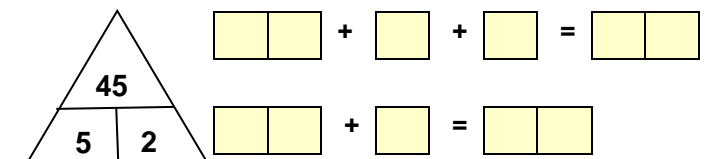
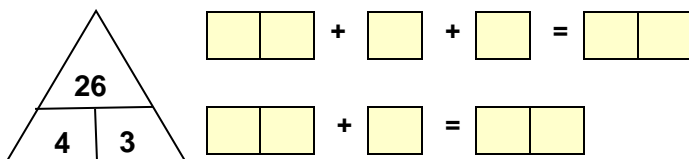
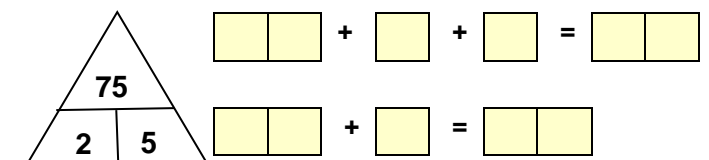
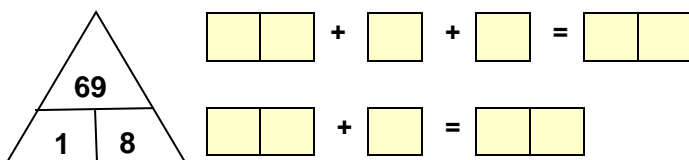
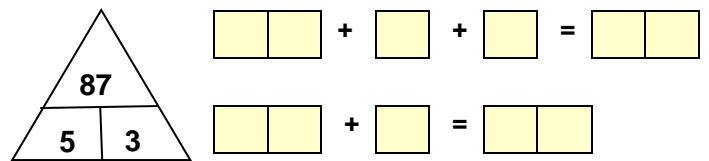
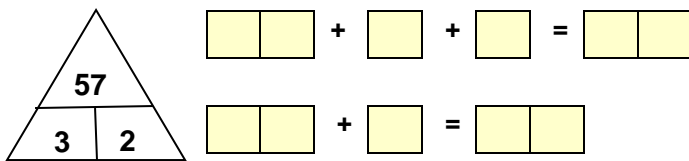
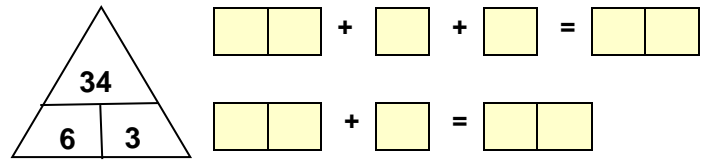
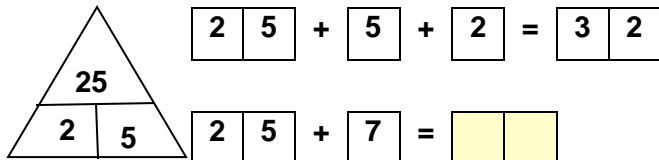




1. Rechne immer erst bis zum nächsten Zehner.



2. Rechne!



1. Sieh dir das Beispiel an und rechne schrittweise!

$$\boxed{65} + \boxed{8} = \boxed{?}$$

$$\boxed{65} + \boxed{5} + \boxed{3} = \boxed{73}$$

$$\boxed{47} + \boxed{9} = \boxed{?}$$

$$\boxed{47} + \boxed{3} + \boxed{6} = \boxed{56}$$

$$\boxed{45} + \boxed{7} = \boxed{52}$$

$$\boxed{45} + \boxed{5} + \boxed{2} = \boxed{52}$$

$$\boxed{67} + \boxed{7} = \boxed{\phantom{00}}$$

$$\boxed{67} + \boxed{\phantom{00}} + \boxed{\phantom{00}} = \boxed{\phantom{00}}$$

$$\boxed{76} + \boxed{8} = \boxed{\phantom{00}}$$

$$\boxed{76} + \boxed{\phantom{00}} + \boxed{\phantom{00}} = \boxed{\phantom{00}}$$

$$\boxed{24} + \boxed{9} = \boxed{\phantom{00}}$$

$$\boxed{24} + \boxed{\phantom{00}} + \boxed{\phantom{00}} = \boxed{\phantom{00}}$$

$$\boxed{39} + \boxed{3} = \boxed{\phantom{00}}$$

$$\boxed{39} + \boxed{\phantom{00}} + \boxed{\phantom{00}} = \boxed{\phantom{00}}$$

$$\boxed{47} + \boxed{5} = \boxed{\phantom{00}}$$

$$\boxed{47} + \boxed{\phantom{00}} + \boxed{\phantom{00}} = \boxed{\phantom{00}}$$

$$\boxed{58} + \boxed{5} = \boxed{\phantom{00}}$$

$$\boxed{58} + \boxed{\phantom{00}} + \boxed{\phantom{00}} = \boxed{\phantom{00}}$$

$$\boxed{85} + \boxed{6} = \boxed{\phantom{00}}$$

$$\boxed{85} + \boxed{\phantom{00}} + \boxed{\phantom{00}} = \boxed{\phantom{00}}$$



2. Rechne schrittweise!

	+7		
46	+4	+3	
28			
84			
57			
65			
39			

	+9		
32	+8	+1	
38			
56			
73			
88			
64			

1. Rechne immer erst bis zum nächsten Zehner.

$$\begin{array}{c} \triangle \\ \hline 72 \\ \hline 8 \quad 1 \end{array} \quad \begin{array}{c} \boxed{2} \boxed{6} + \boxed{4} + \boxed{3} = \boxed{3} \boxed{3} \\ \boxed{2} \boxed{6} + \boxed{7} = \boxed{\phantom{00}} \end{array}$$

$$\begin{array}{c} \triangle \\ \hline 67 \\ \hline 3 \quad 6 \end{array} \quad \begin{array}{c} \boxed{\phantom{00}} + \boxed{\phantom{00}} + \boxed{\phantom{00}} = \boxed{\phantom{00}} \boxed{\phantom{00}} \\ \boxed{\phantom{00}} + \boxed{\phantom{00}} = \boxed{\phantom{00}} \boxed{\phantom{00}} \end{array}$$

$$\begin{array}{c} \triangle \\ \hline 84 \\ \hline 6 \quad 3 \end{array} \quad \begin{array}{c} \boxed{\phantom{00}} + \boxed{\phantom{00}} + \boxed{\phantom{00}} = \boxed{\phantom{00}} \boxed{\phantom{00}} \\ \boxed{\phantom{00}} + \boxed{\phantom{00}} = \boxed{\phantom{00}} \boxed{\phantom{00}} \end{array}$$

$$\begin{array}{c} \triangle \\ \hline 58 \\ \hline 2 \quad 7 \end{array} \quad \begin{array}{c} \boxed{\phantom{00}} + \boxed{\phantom{00}} + \boxed{\phantom{00}} = \boxed{\phantom{00}} \boxed{\phantom{00}} \\ \boxed{\phantom{00}} + \boxed{\phantom{00}} = \boxed{\phantom{00}} \boxed{\phantom{00}} \end{array}$$

$$\begin{array}{c} \triangle \\ \hline 91 \\ \hline 9 \quad 1 \end{array} \quad \begin{array}{c} \boxed{\phantom{00}} + \boxed{\phantom{00}} + \boxed{\phantom{00}} = \boxed{\phantom{00}} \boxed{\phantom{00}} \\ \boxed{\phantom{00}} + \boxed{\phantom{00}} = \boxed{\phantom{00}} \boxed{\phantom{00}} \end{array}$$

$$\begin{array}{c} \triangle \\ \hline 37 \\ \hline 3 \quad 6 \end{array} \quad \begin{array}{c} \boxed{\phantom{00}} + \boxed{\phantom{00}} + \boxed{\phantom{00}} = \boxed{\phantom{00}} \boxed{\phantom{00}} \\ \boxed{\phantom{00}} + \boxed{\phantom{00}} = \boxed{\phantom{00}} \boxed{\phantom{00}} \end{array}$$

2. Rechne!



$$\begin{array}{c} \boxed{2} \boxed{7} \xrightarrow{+ \boxed{8}} \boxed{\phantom{00}} \boxed{\phantom{00}} \\ \downarrow \quad \uparrow \\ + \boxed{3} \quad + \boxed{5} \\ \boxed{3} \boxed{0} \end{array}$$


$$\begin{array}{c} \boxed{3} \boxed{8} \xrightarrow{+ \boxed{8}} \boxed{\phantom{00}} \boxed{\phantom{00}} \\ \downarrow \quad \uparrow \\ + \boxed{\phantom{00}} \quad + \boxed{\phantom{00}} \\ \boxed{\phantom{00}} \boxed{\phantom{00}} \end{array}$$

$$\begin{array}{c} \boxed{3} \boxed{8} \xrightarrow{+ \boxed{7}} \boxed{\phantom{00}} \boxed{\phantom{00}} \\ \downarrow \quad \uparrow \\ + \boxed{\phantom{00}} \quad + \boxed{\phantom{00}} \\ \boxed{\phantom{00}} \boxed{\phantom{00}} \end{array}$$

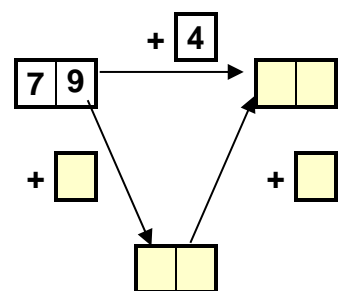
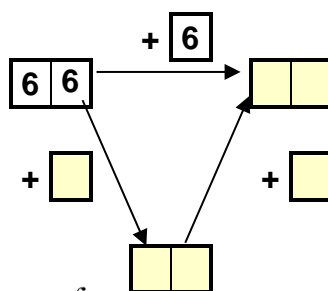
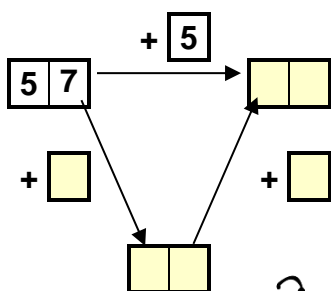
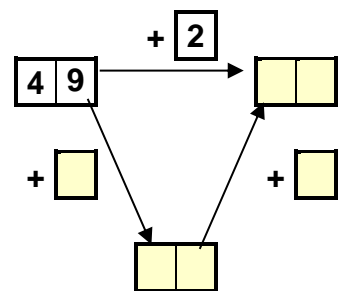
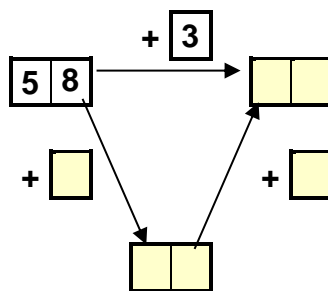
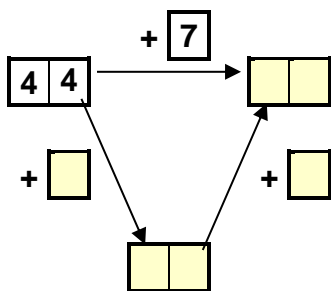
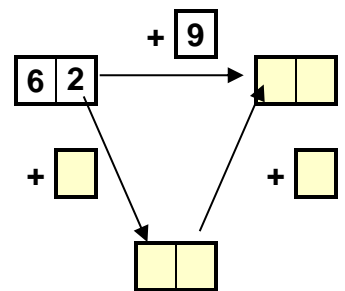
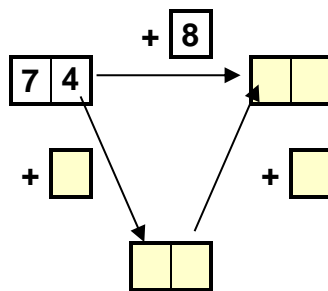
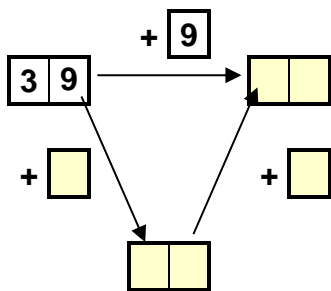
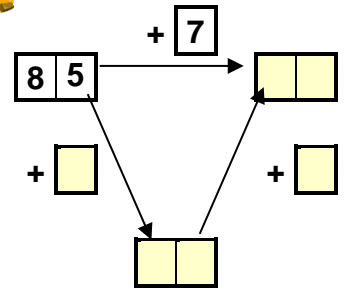
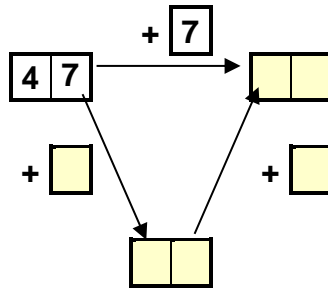
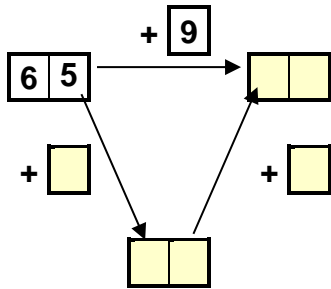
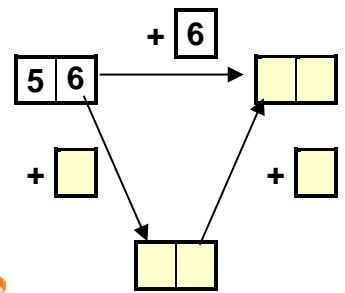
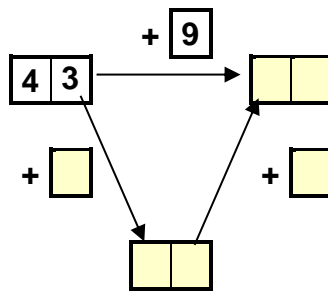
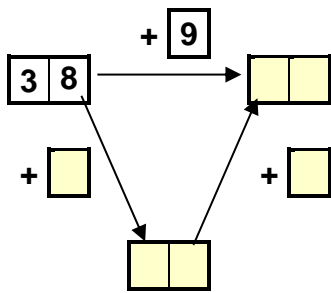
$$\begin{array}{c} \boxed{2} \boxed{9} \xrightarrow{+ \boxed{7}} \boxed{\phantom{00}} \boxed{\phantom{00}} \\ \downarrow \quad \uparrow \\ + \boxed{1} \quad + \boxed{\phantom{00}} \\ \boxed{\phantom{00}} \boxed{\phantom{00}} \end{array}$$

$$\begin{array}{c} \boxed{2} \boxed{4} \xrightarrow{+ \boxed{9}} \boxed{\phantom{00}} \boxed{\phantom{00}} \\ \downarrow \quad \uparrow \\ + \boxed{6} \quad + \boxed{\phantom{00}} \\ \boxed{\phantom{00}} \boxed{\phantom{00}} \end{array}$$

$$\begin{array}{c} \boxed{3} \boxed{2} \xrightarrow{+ \boxed{9}} \boxed{\phantom{00}} \boxed{\phantom{00}} \\ \downarrow \quad \uparrow \\ + \boxed{\phantom{00}} \quad + \boxed{\phantom{00}} \\ \boxed{\phantom{00}} \boxed{\phantom{00}} \end{array}$$



1. Rechne immer erst bis zum nächsten Zehner.



1. Rechne in zwei Schritten, zuerst bis zum nächsten Zehner und dann den Rest.

$$\begin{array}{r} 28 + 5 = 33 \\ \hline 28 + 2 = 30 \\ \hline 30 + 3 = 33 \end{array}$$

$$\begin{array}{r} 37 + 7 = \square\square \\ \hline 37 + 3 = \square\square \\ \hline \square\square + \square = \square\square \end{array}$$

$$\begin{array}{r} 45 + 8 = \square\square \\ \hline \square\square + \square = \square\square \\ \hline \square\square + \square = \square\square \end{array}$$

$$\begin{array}{r} 37 + 9 = \square\square \\ \hline \square\square + \square = \square\square \\ \hline \square\square + \square = \square\square \end{array}$$

$$\begin{array}{r} 65 + 6 = \square\square \\ \hline \square\square + \square = \square\square \\ \hline \square\square + \square = \square\square \end{array}$$

$$\begin{array}{r} 74 + 9 = \square\square \\ \hline \square\square + \square = \square\square \\ \hline \square\square + \square = \square\square \end{array}$$

$$\begin{array}{r} 39 + 3 = \square\square \\ \hline \square\square + \square = \square\square \\ \hline \square\square + \square = \square\square \end{array}$$

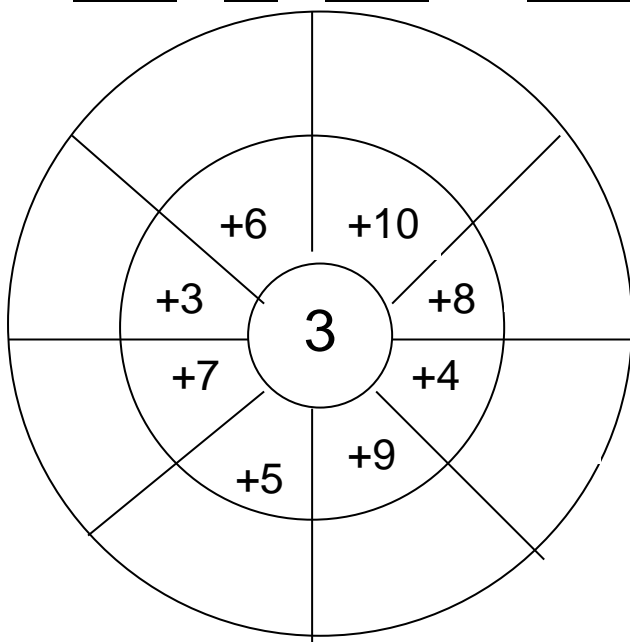
$$\begin{array}{r} 89 + 4 = \square\square \\ \hline \square\square + \square = \square\square \\ \hline \square\square + \square = \square\square \end{array}$$

$$\begin{array}{r} 84 + 8 = \square\square \\ \hline \square\square + \square = \square\square \\ \hline \square\square + \square = \square\square \end{array}$$

$$\begin{array}{r} 67 + 6 = \square\square \\ \hline \square\square + \square = \square\square \\ \hline \square\square + \square = \square\square \end{array}$$

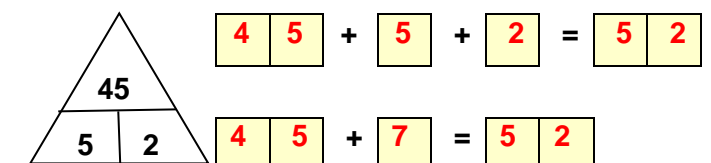
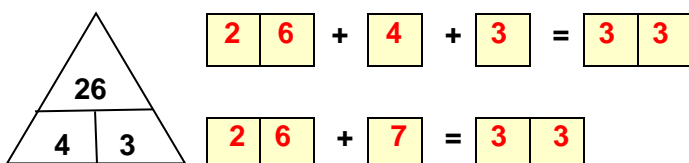
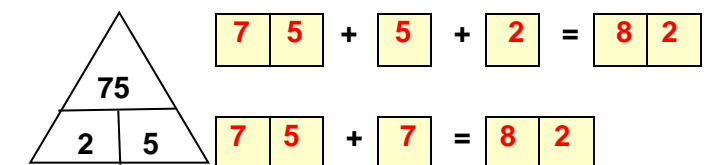
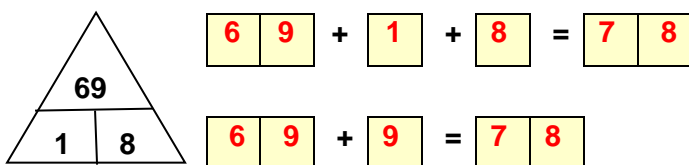
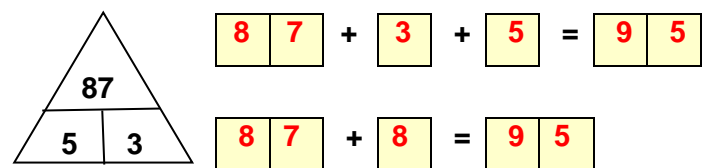
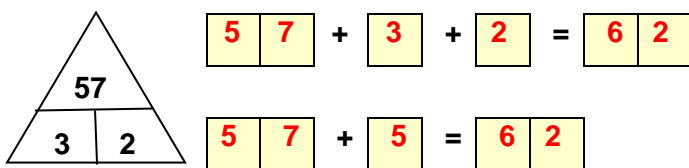
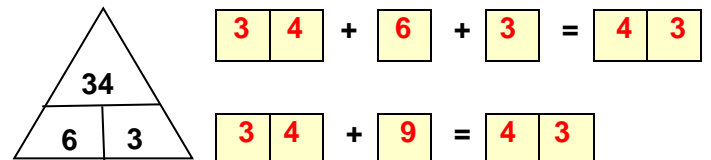

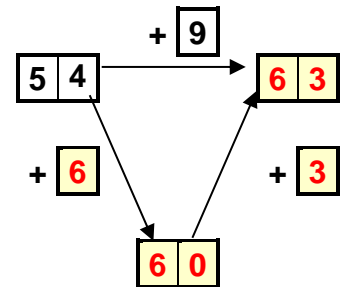
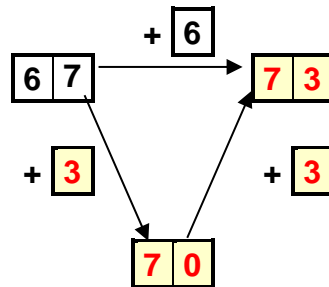
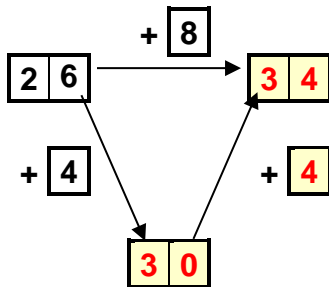
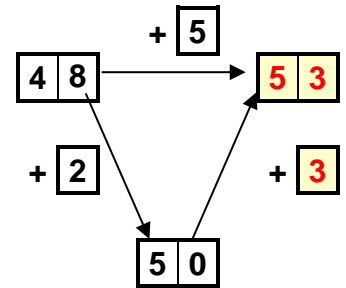
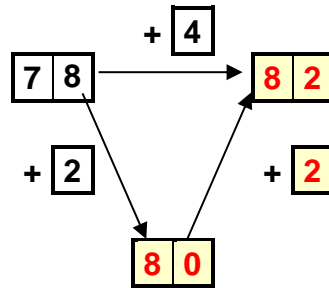
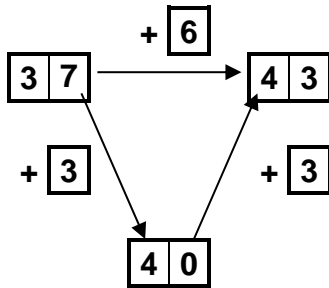
$$\begin{array}{r} 72 + 9 = \square\square \\ \hline \square\square + \square = \square\square \\ \hline \square\square + \square = \square\square \end{array}$$

$$\begin{array}{r} 55 + 8 = \square\square \\ \hline \square\square + \square = \square\square \\ \hline \square\square + \square = \square\square \end{array}$$





1. Rechne immer erst bis zum nächsten Zehner.



1. Sieh dir das Beispiel an und rechne schrittweise!

$$\boxed{65} + \boxed{8} = \boxed{?}$$

$$\boxed{65} + \boxed{5} + \boxed{3} = \boxed{73}$$

$$\boxed{47} + \boxed{9} = \boxed{?}$$

$$\boxed{47} + \boxed{3} + \boxed{6} = \boxed{56}$$

$$\boxed{45} + \boxed{7} = \boxed{52}$$

$$\boxed{45} + \boxed{5} + \boxed{2} = \boxed{52}$$

$$\boxed{67} + \boxed{7} = \boxed{74}$$

$$\boxed{67} + \boxed{3} + \boxed{4} = \boxed{74}$$

$$\boxed{76} + \boxed{8} = \boxed{84}$$

$$\boxed{76} + \boxed{4} + \boxed{4} = \boxed{84}$$

$$\boxed{24} + \boxed{9} = \boxed{33}$$

$$\boxed{24} + \boxed{6} + \boxed{3} = \boxed{33}$$

$$\boxed{39} + \boxed{3} = \boxed{42}$$

$$\boxed{39} + \boxed{1} + \boxed{2} = \boxed{42}$$

$$\boxed{47} + \boxed{5} = \boxed{52}$$

$$\boxed{47} + \boxed{3} + \boxed{2} = \boxed{52}$$

$$\boxed{58} + \boxed{5} = \boxed{63}$$

$$\boxed{58} + \boxed{2} + \boxed{3} = \boxed{63}$$

$$\boxed{85} + \boxed{6} = \boxed{91}$$

$$\boxed{85} + \boxed{5} + \boxed{1} = \boxed{91}$$

2. Rechne schrittweise!

46	+ 4	+ 3	= 53
28	+ 2	+ 5	= 35
84	+ 6	+ 1	= 91
57	+ 3	+ 4	= 64
65	+ 5	+ 2	= 72
39	+ 1	+ 6	= 46

32	+ 8	+ 1	= 41
38	+ 2	+ 7	= 47
56	+ 4	+ 5	= 65
73	+ 7	+ 2	= 82
88	+ 2	+ 7	= 97
64	+ 6	+ 3	= 73



1. Rechne immer erst bis zum nächsten Zehner.

$$\begin{array}{c} \triangle \\ \hline 72 \\ \hline 8 \quad 1 \end{array} \quad \begin{array}{c} \boxed{2} \boxed{6} + \boxed{4} + \boxed{3} = \boxed{3} \boxed{3} \\ \boxed{2} \boxed{6} + \boxed{7} = \boxed{3} \boxed{3} \end{array}$$

$$\begin{array}{c} \triangle \\ \hline 67 \\ \hline 3 \quad 6 \end{array} \quad \begin{array}{c} \boxed{6} \boxed{7} + \boxed{3} + \boxed{6} = \boxed{7} \boxed{6} \\ \boxed{6} \boxed{7} + \boxed{9} = \boxed{7} \boxed{6} \end{array}$$

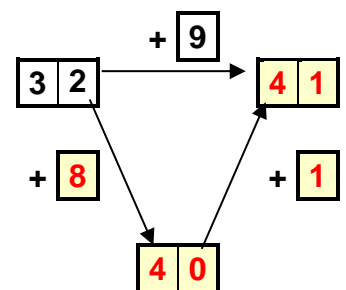
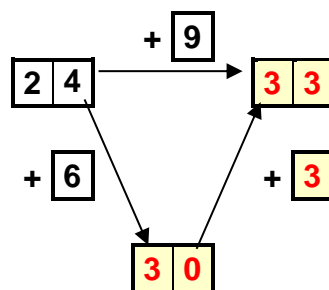
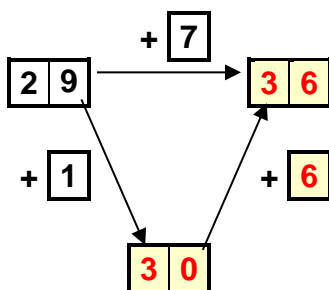
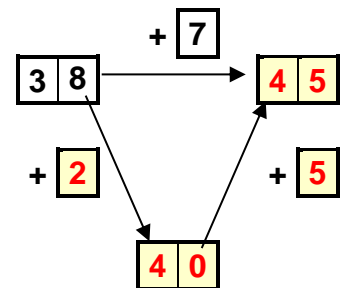
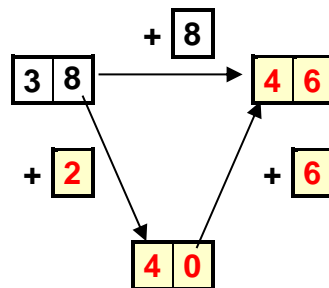
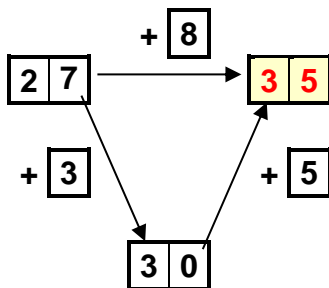
$$\begin{array}{c} \triangle \\ \hline 84 \\ \hline 6 \quad 3 \end{array} \quad \begin{array}{c} \boxed{8} \boxed{4} + \boxed{6} + \boxed{3} = \boxed{9} \boxed{3} \\ \boxed{8} \boxed{4} + \boxed{9} = \boxed{9} \boxed{3} \end{array}$$

$$\begin{array}{c} \triangle \\ \hline 58 \\ \hline 2 \quad 7 \end{array} \quad \begin{array}{c} \boxed{5} \boxed{8} + \boxed{2} + \boxed{7} = \boxed{6} \boxed{7} \\ \boxed{5} \boxed{8} + \boxed{9} = \boxed{6} \boxed{7} \end{array}$$

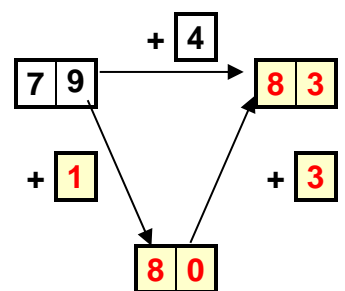
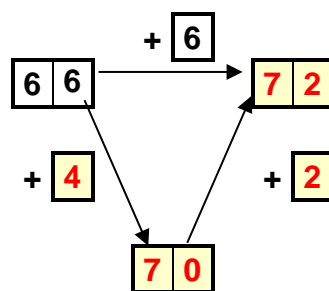
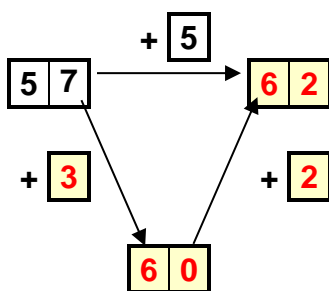
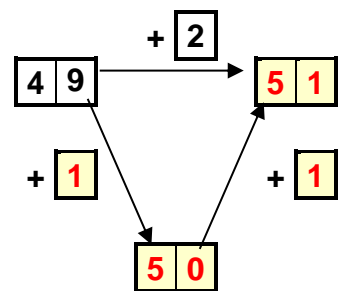
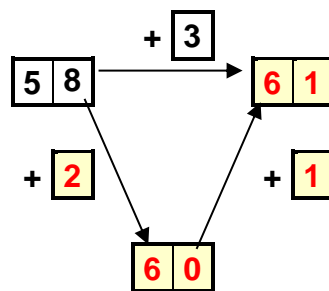
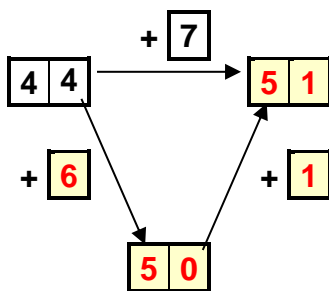
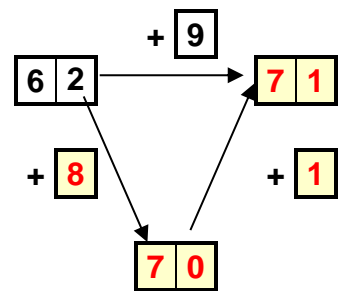
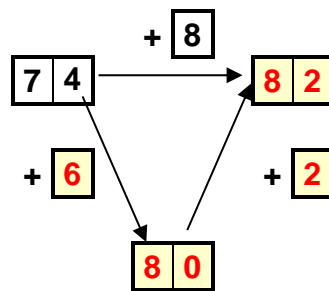
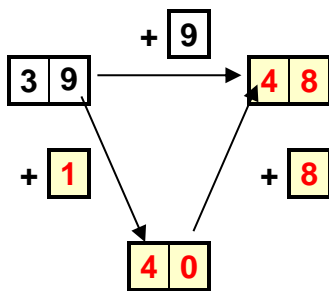
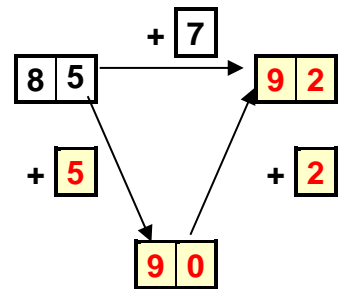
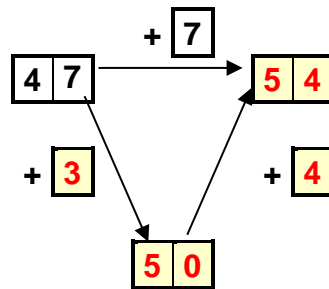
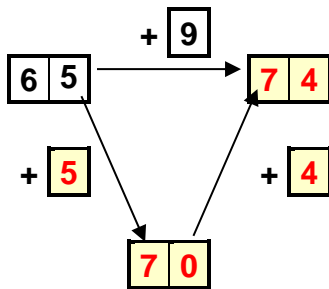
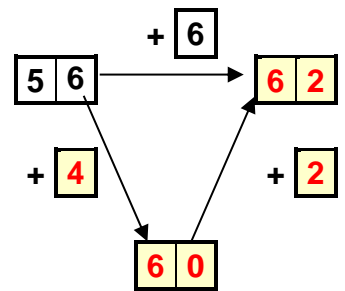
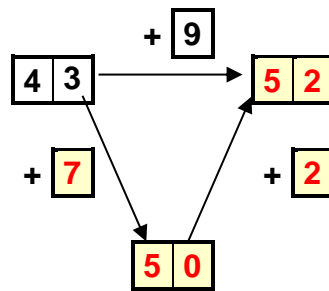
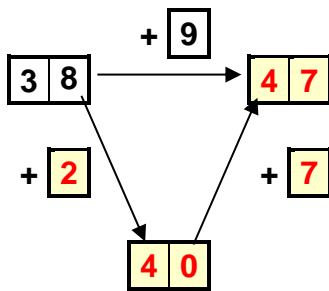
$$\begin{array}{c} \triangle \\ \hline 81 \\ \hline 9 \quad 1 \end{array} \quad \begin{array}{c} \boxed{8} \boxed{1} + \boxed{9} + \boxed{1} = \boxed{9} \boxed{1} \\ \boxed{8} \boxed{1} + \boxed{10} = \boxed{9} \boxed{1} \end{array}$$

$$\begin{array}{c} \triangle \\ \hline 37 \\ \hline 3 \quad 6 \end{array} \quad \begin{array}{c} \boxed{3} \boxed{7} + \boxed{3} + \boxed{6} = \boxed{4} \boxed{6} \\ \boxed{3} \boxed{7} + \boxed{9} = \boxed{4} \boxed{6} \end{array}$$

2. Rechne!



1. Rechne immer erst bis zum nächsten Zehner.



1. Rechne in zwei Schritten, zuerst bis zum nächsten Zehner und dann den Rest.

$$\begin{array}{r} 28 + 5 = 33 \\ \hline 28 + 2 = 30 \\ 30 + 3 = 33 \end{array}$$

$$\begin{array}{r} 37 + 7 = 44 \\ \hline 37 + 3 = 40 \\ 40 + 4 = 44 \end{array}$$

$$\begin{array}{r} 45 + 8 = 53 \\ \hline 45 + 5 = 50 \\ 50 + 3 = 53 \end{array}$$

$$\begin{array}{r} 37 + 9 = 46 \\ \hline 37 + 3 = 40 \\ 40 + 6 = 46 \end{array}$$

$$\begin{array}{r} 65 + 6 = 71 \\ \hline 65 + 5 = 70 \\ 70 + 1 = 71 \end{array}$$

$$\begin{array}{r} 74 + 9 = 83 \\ \hline 74 + 6 = 80 \\ 80 + 3 = 83 \end{array}$$

$$\begin{array}{r} 39 + 3 = 42 \\ \hline 39 + 1 = 40 \\ 40 + 2 = 42 \end{array}$$

$$\begin{array}{r} 89 + 4 = 93 \\ \hline 89 + 1 = 90 \\ 90 + 3 = 93 \end{array}$$

$$\begin{array}{r} 84 + 8 = 92 \\ \hline 84 + 6 = 90 \\ 90 + 2 = 92 \end{array}$$

$$\begin{array}{r} 67 + 6 = 73 \\ \hline 67 + 3 = 70 \\ 70 + 3 = 73 \end{array}$$

$$\begin{array}{r} 72 + 9 = 81 \\ \hline 72 + 8 = 80 \\ 80 + 1 = 81 \end{array}$$

$$\begin{array}{r} 55 + 8 = 63 \\ \hline 55 + 5 = 60 \\ 60 + 3 = 63 \end{array}$$

