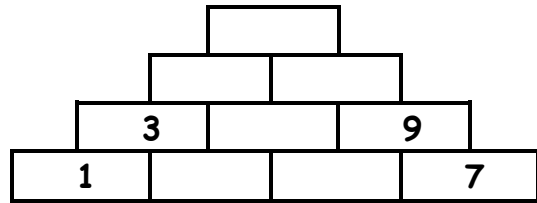
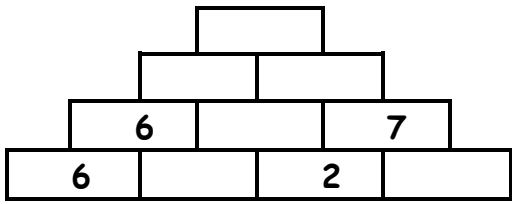


Pyramiden und Tabellen - Station 1



+	7	6	5
9			
8			
7			

-	9	8	6
15			
13			
12			



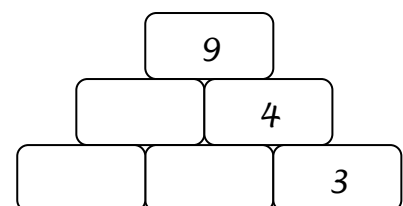
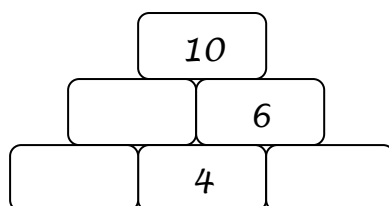
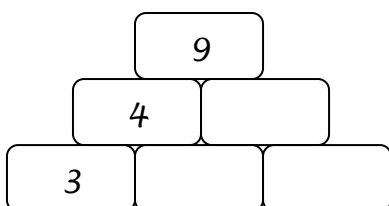
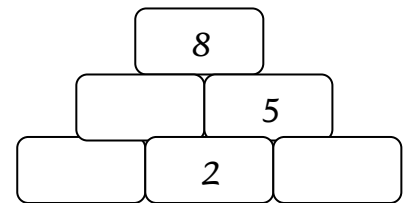
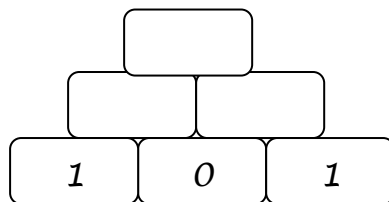
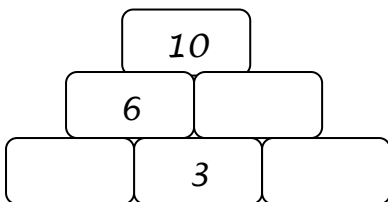
15		
	+	6
8	+	
	+	7
	+	10



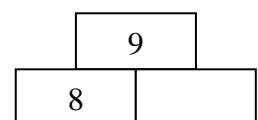
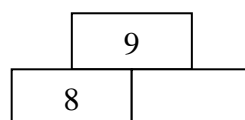
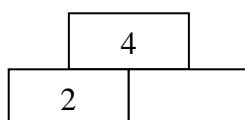
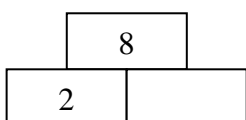
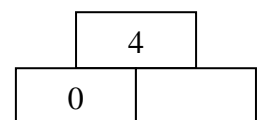
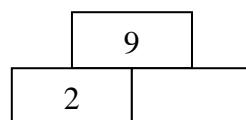
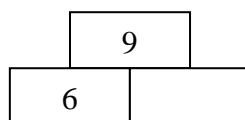
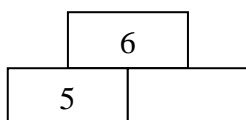
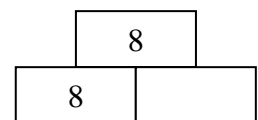
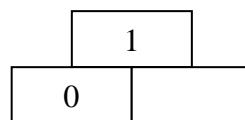
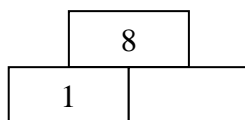
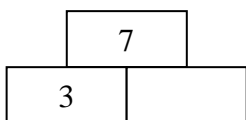
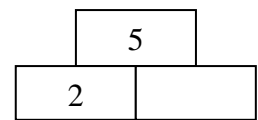
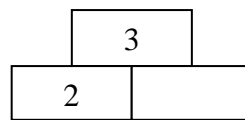
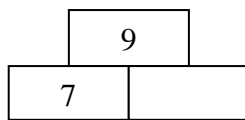
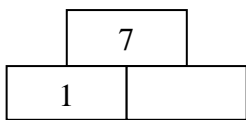
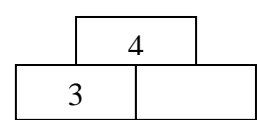
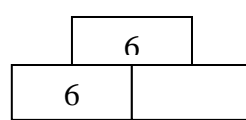
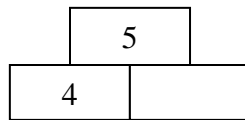
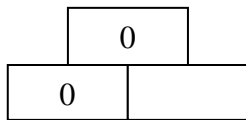
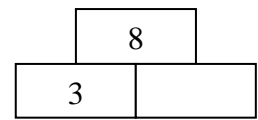
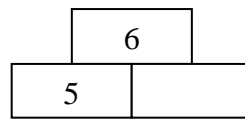
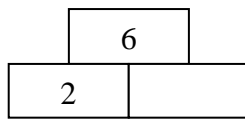
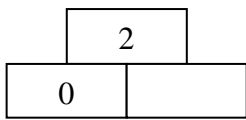
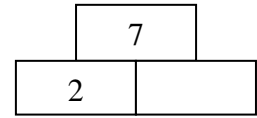
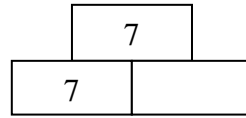
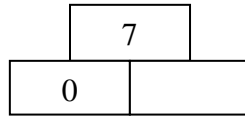
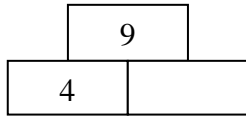
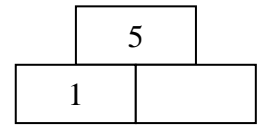
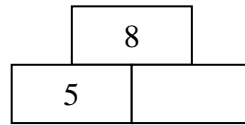
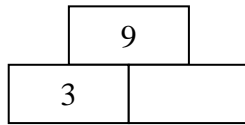
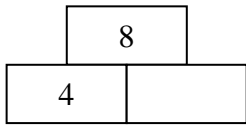
+	6	4	3	5
3				
11				
14				

-	4	3	0	5
7				
9				
16				

+	2	3	0	4
6				
4				
12				



Pyramiden und Tabellen - Station 2



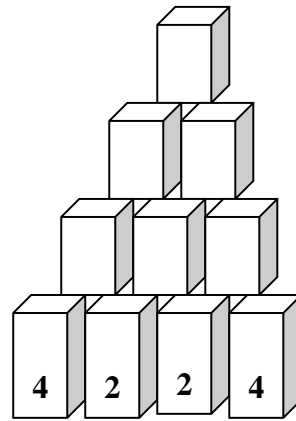
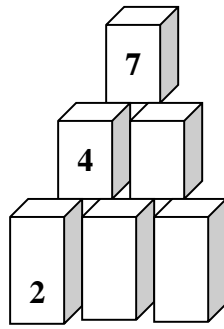
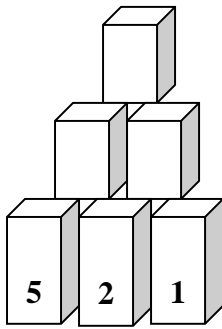
7	
3 + 4 =	
4 + 3 =	
7 - 3 =	
7 - 4 =	

5	
+	=
+	=
-	=
-	=



8	
+	=
+	=
-	=
-	=

Pyramiden und Tabellen - Station 3

1. Rechne aus!



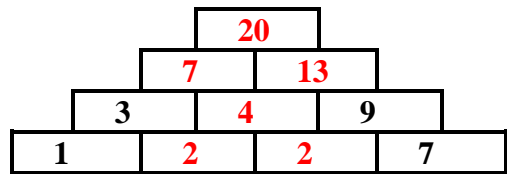
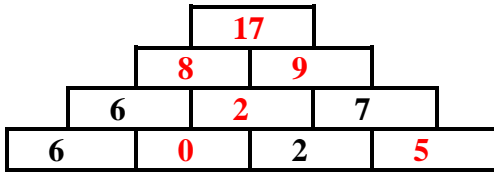
Erfinde Aufgaben!



- Plus und Minusaufgaben



Pyramiden und Tabellen – Lösung – Station 1



+	7	6	5
9	16	15	14
8	15	14	13
7	14	13	12

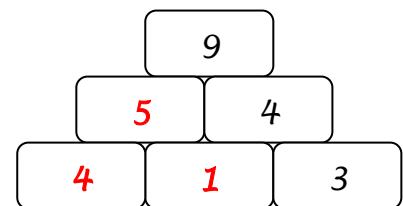
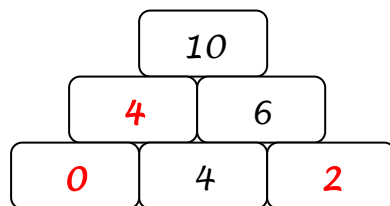
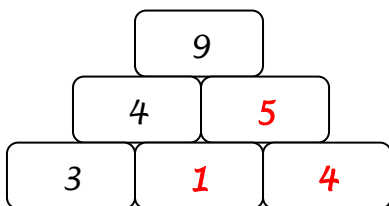
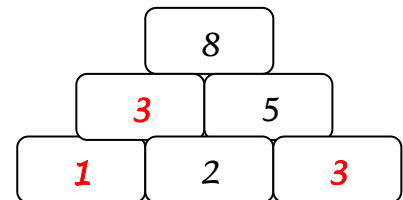
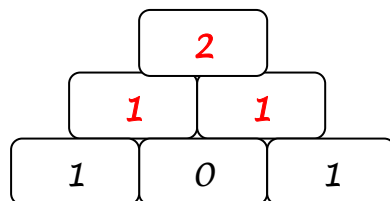
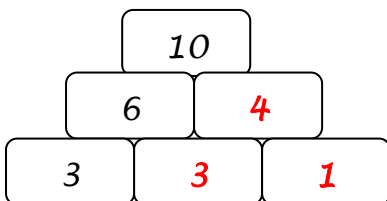
-	9	8	6
15	6	7	9
13	4	5	7
12	3	4	6

15		
9	+	6
8	+	7
8	+	7
5	+	10

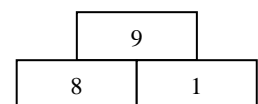
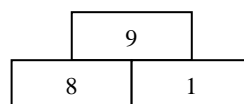
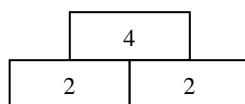
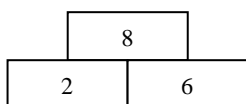
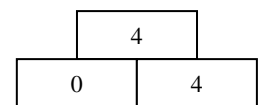
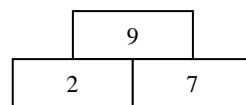
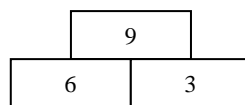
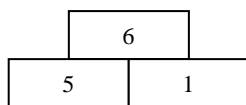
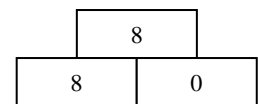
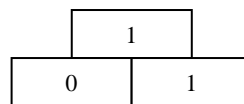
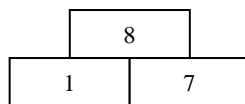
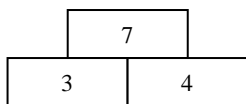
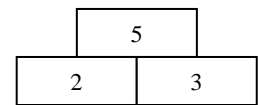
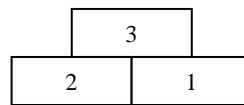
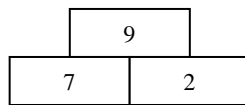
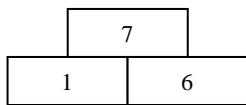
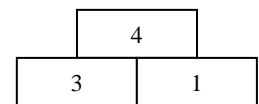
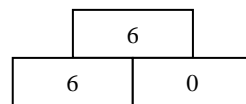
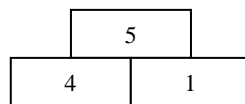
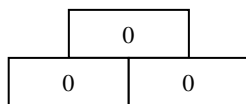
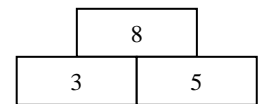
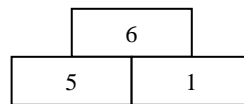
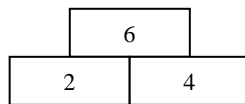
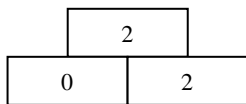
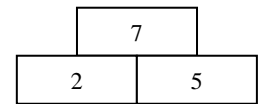
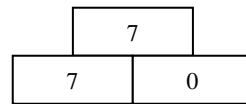
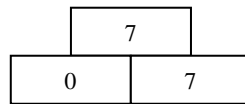
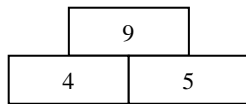
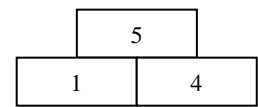
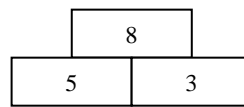
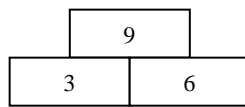
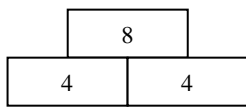
+	6	4	3	5
3	9	7	6	8
11	17	15	14	16
14	20	18	17	19

-	4	3	0	5
7	3	4	7	2
19	15	16	19	14
16	12	13	16	11

+	2	3	0	4
6	8	9	6	10
4	6	7	4	8
12	14	15	12	16



Pyramiden und Tabellen – Lösung – Station 2



<table border="1" style="margin: auto; text-align: center;"> <tr><td colspan="2">7</td></tr> <tr><td colspan="2">$3 + 4 = 7$</td></tr> <tr><td colspan="2">$4 + 3 = 7$</td></tr> <tr><td colspan="2">$7 - 3 = 4$</td></tr> <tr><td colspan="2">$7 - 4 = 3$</td></tr> </table>	7		$3 + 4 = 7$		$4 + 3 = 7$		$7 - 3 = 4$		$7 - 4 = 3$		<table border="1" style="margin: auto; text-align: center;"> <tr><td colspan="2">5</td></tr> <tr><td colspan="2">$2 + 3 = 5$</td></tr> <tr><td colspan="2">$3 + 2 = 5$</td></tr> <tr><td colspan="2">$5 - 2 = 3$</td></tr> <tr><td colspan="2">$5 - 3 = 2$</td></tr> </table>	5		$2 + 3 = 5$		$3 + 2 = 5$		$5 - 2 = 3$		$5 - 3 = 2$		<table border="1" style="margin: auto; text-align: center;"> <tr><td colspan="2">8</td></tr> <tr><td colspan="2">$4 + 4 = 8$</td></tr> <tr><td colspan="2">$4 + 4 = 8$</td></tr> <tr><td colspan="2">$8 - 4 = 4$</td></tr> <tr><td colspan="2">$8 - 4 = 4$</td></tr> </table>	8		$4 + 4 = 8$		$4 + 4 = 8$		$8 - 4 = 4$		$8 - 4 = 4$	
7																																
$3 + 4 = 7$																																
$4 + 3 = 7$																																
$7 - 3 = 4$																																
$7 - 4 = 3$																																
5																																
$2 + 3 = 5$																																
$3 + 2 = 5$																																
$5 - 2 = 3$																																
$5 - 3 = 2$																																
8																																
$4 + 4 = 8$																																
$4 + 4 = 8$																																
$8 - 4 = 4$																																
$8 - 4 = 4$																																

1. Rechne aus!

