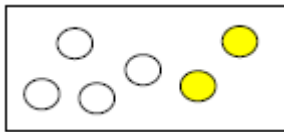


Klassenarbeit - Mathetests im 1. Halbjahr

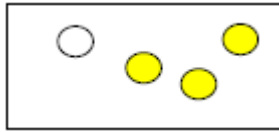
Mengen erfassen; Minusaufgaben; Addition; Plusaufgaben

Aufgabe 1

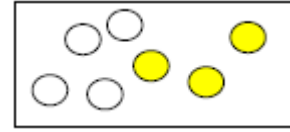
Subtrahieren im Zahlenraum bis 10. Ergänze.



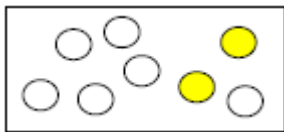
$$6 - 2 = \underline{\quad}$$



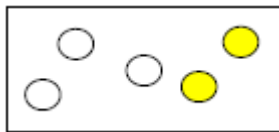
$$4 - \underline{\quad} = \underline{\quad}$$



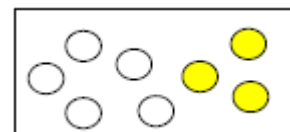
$$7 - \underline{\quad} = \underline{\quad}$$



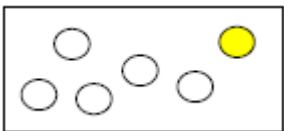
$$\underline{\quad} - \underline{\quad} = \underline{\quad}$$



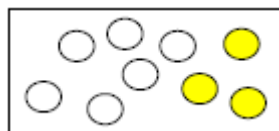
$$\underline{\quad} - \underline{\quad} = \underline{\quad}$$



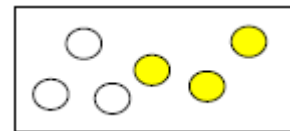
$$\underline{\quad} - \underline{\quad} = \underline{\quad}$$



$$\underline{\quad} - \underline{\quad} = \underline{\quad}$$



$$\underline{\quad} - \underline{\quad} = \underline{\quad}$$



$$\underline{\quad} - \underline{\quad} = \underline{\quad}$$



$$7 - 2 = \underline{\quad}$$



$$6 - 3 = \underline{\quad}$$



$$8 - 3 = \underline{\quad}$$

Aufgabe 2

Berechne.

$4 - 1 = \underline{\quad}$

$3 - 2 = \underline{\quad}$

$6 - 3 = \underline{\quad}$

$8 - 2 = \underline{\quad}$

$5 - 1 = \underline{\quad}$

$4 - 2 = \underline{\quad}$

$7 - 3 = \underline{\quad}$

$9 - 2 = \underline{\quad}$

$6 - 1 = \underline{\quad}$

$5 - 2 = \underline{\quad}$

$8 - 3 = \underline{\quad}$

$10 - 2 = \underline{\quad}$

$7 - 3 = \underline{\quad}$

$4 - 3 = \underline{\quad}$

$4 - 4 = \underline{\quad}$

$8 - 5 = \underline{\quad}$

$7 - 2 = \underline{\quad}$

$9 - 6 = \underline{\quad}$

___/15P

Aufgabe 3

Rechne folgende Aufgaben.

$4 + 2 = \underline{\quad}$

$8 + 2 = \underline{\quad}$

$2 + 4 = \underline{\quad}$

$3 + 3 = \underline{\quad}$

$4 + 6 = \underline{\quad}$

$7 + 2 = \underline{\quad}$

$2 + 6 = \underline{\quad}$

$1 + 4 = \underline{\quad}$

$3 + 4 = \underline{\quad}$

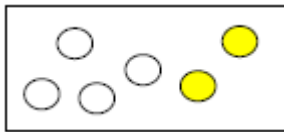
___/9P

Lösung Klassenarbeit - Mathetests im 1. Halbjahr

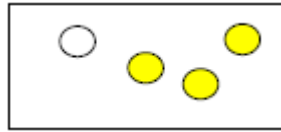
Mengen erfassen; Minusaufgaben; Addition; Plusaufgaben

Aufgabe 1

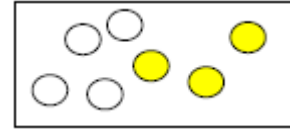
Subtrahieren im Zahlenraum bis 10.



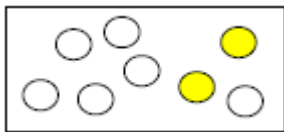
$$6 - 2 = 4$$



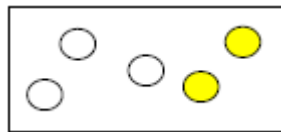
$$4 - 3 = 1$$



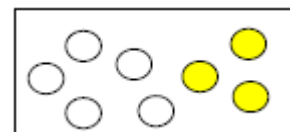
$$7 - 3 = 4$$



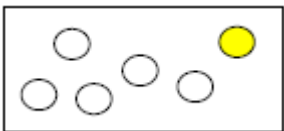
$$8 - 2 = 6$$



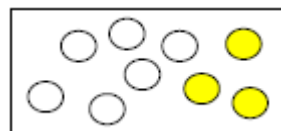
$$5 - 2 = 3$$



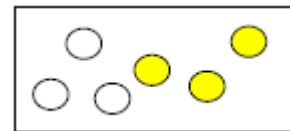
$$8 - 3 = 5$$



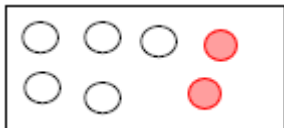
$$6 - 1 = 5$$



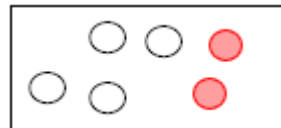
$$9 - 3 = 6$$



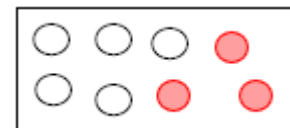
$$6 - 3 = 3$$



$$7 - 2 = 5$$



$$6 - 2 = 4$$



$$8 - 3 = 5$$

Aufgabe 2

Berechne.

$4 - 1 = 3$

$3 - 2 = 1$

$6 - 3 = 3$

$8 - 2 = 6$

$5 - 1 = 4$

$4 - 2 = 2$

$7 - 3 = 4$

$9 - 2 = 7$

$6 - 1 = 5$

$5 - 2 = 3$

$8 - 3 = 5$

$10 - 2 = 8$

$7 - 3 = 4$

$4 - 3 = 1$

$4 - 4 = 0$

$8 - 5 = 3$

$7 - 2 = 5$

$9 - 6 = 3$

___/15P

Aufgabe 3

Rechne folgende Aufgaben.

$4 + 2 = 6$

$8 + 2 = 10$

$2 + 4 = 6$

$3 + 3 = 6$

$4 + 6 = 10$

$7 + 2 = 9$

$2 + 6 = 8$

$1 + 4 = 5$

$3 + 4 = 7$

___/9P

Viel Glück!!

Gesamt: ___/50P

Note	1	1-	1-2	2+	2	2-	2-3	3+	3	3-	3-4	4+	4	4-	4-5	5+	5	5-	5-6	6+
Punkte	47	45	43	41	40	38	36	34	32	30	27	25	22	20	17	15	12	10	8	6